


What Money Can Really Do

Quick Reference Answer Guide

The answers below correspond to the exercises in *What Money Can Buy*. The correct ones are bolded for convenience, with detailed explanations where applicable.

Exercise 1

1. Match the name of the coin to its picture.




2. How much is each coin worth?




What Money Can Really Do: Answer Guide

Exercise 1 continued

3. Count the coins to figure out how many **cents** are in each:



4. Which kid has the **most** money? Circle the name



Exercise 2

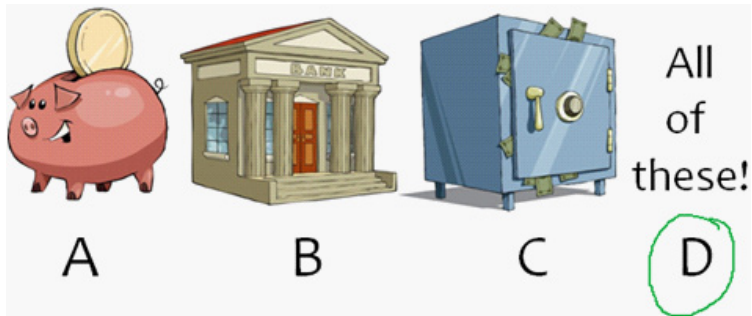
3. How much money is this check worth?



What Money Can Really Do: Answer Guide

Exercise 2 continued

2. Where can you store money?



3. Circle the item that costs the least amount of money.



4. Which kid is thinking about money?

Beth

Exercise 3

1. If your allowance is \$5 a week, how many weeks would it take to save \$15?

A: 1 week

B: 2 weeks

C: 3 weeks

D: 4 weeks

2. Which kid is saving money?

